

Name _____

Count the images. Write the number of images in the boxes above each image and write the total number in the last box.




+




=




+



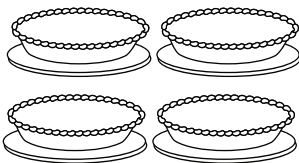
=




+



=



+



=