



Name _____


Draw a line to match the questions on the left with the correct number of images on the right.




$$3 - 1 =$$



$$4 - 3 =$$



$$5 - 2 =$$



$$6 - 1 =$$

