



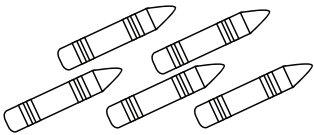
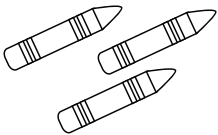


Name _____

Count the images. Write the number of images in the boxes above each image. Subtract the numbers and write the answer in the last box.

<div style="border: 1px solid black; width: 40px; height: 40px; display: flex; align-items: center; justify-content: center; font-size: 24px;">5</div>	$-$	<div style="border: 1px solid black; width: 40px; height: 40px; display: flex; align-items: center; justify-content: center; font-size: 24px;">2</div>	$=$	<div style="border: 1px solid black; width: 100px; height: 100px; display: flex; align-items: center; justify-content: center; font-size: 36px;">3</div>
				

<div style="border: 1px solid black; width: 40px; height: 40px;"></div>	$-$	<div style="border: 1px solid black; width: 40px; height: 40px;"></div>	$=$	<div style="border: 1px solid black; width: 100px; height: 100px;"></div>
				

<div style="border: 1px solid black; width: 40px; height: 40px;"></div>	$-$	<div style="border: 1px solid black; width: 40px; height: 40px;"></div>	$=$	<div style="border: 1px solid black; width: 100px; height: 100px;"></div>
				

<div style="border: 1px solid black; width: 40px; height: 40px;"></div>	$-$	<div style="border: 1px solid black; width: 40px; height: 40px;"></div>	$=$	<div style="border: 1px solid black; width: 100px; height: 100px;"></div>
