



Name _____


Count the number of images and write the total number in the box on the left. Subtract the number from the total number of images and write the answer in the box on the right.



$$\boxed{} - 2 = \boxed{}$$



$$\boxed{} - 3 = \boxed{}$$




$$\boxed{} - 4 = \boxed{}$$




$$\boxed{} - 1 = \boxed{}$$



$$\boxed{} - 2 = \boxed{}$$




$$\boxed{} - 5 = \boxed{}$$



$$\boxed{} - 6 = \boxed{}$$



$$\boxed{} - 1 = \boxed{}$$




$$\boxed{} - 2 = \boxed{}$$



$$\boxed{} - 3 = \boxed{}$$



$$\boxed{} - 7 = \boxed{}$$



$$\boxed{} - 2 = \boxed{}$$