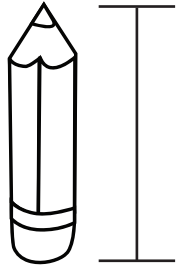


Name _____

Circle the correct measurement for each item.

pencil



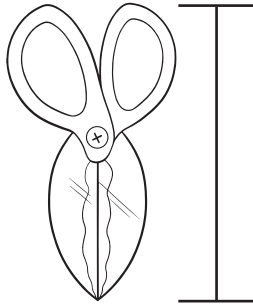
about 7.5 inches
about 20 inches

cup



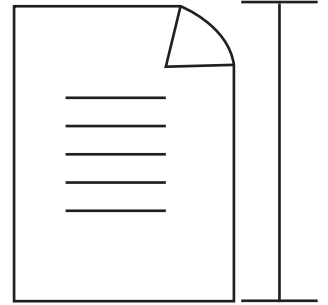
about 30 inches
about 4 inches

scissors



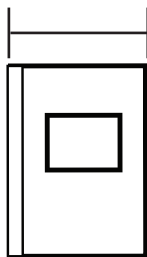
about 2 inches
about 18 inches

a piece
of paper



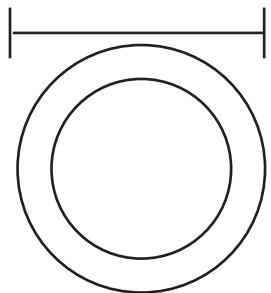
about 11 inches
about 3 inches

notebook



about 8.5 inches
about 4 inches

plate



about 12 inches
about 2 inches