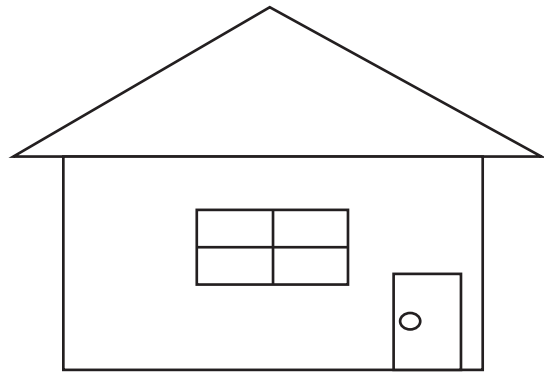
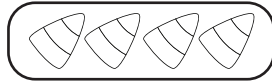
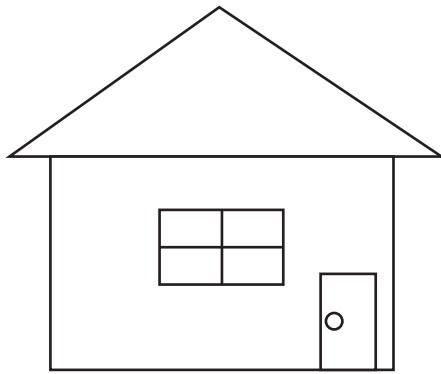


Name _____

How much candy did Emma get on Halloween?

Emma got 4 candies at the first house. The second house gave her 5 candies. How many candies did she get in all?



Write the equation.

_____ + _____ = _____

Number Grid

1	2	3	4	5	6	7	8	9	10
---	---	---	---	---	---	---	---	---	----

Answer: _____ candies