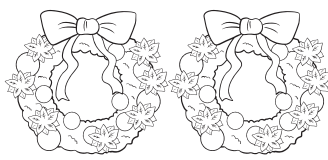

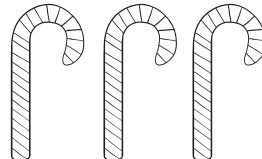
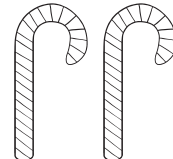






Name \_\_\_\_\_

Count the pictures. Write the number of pictures in the boxes above each picture. Subtract the numbers and write the answer in the last box.

<input style="width: 100%; height: 100%;" type="text"/>	<input style="width: 100%; height: 100%;" type="text"/>	=	<input style="width: 100%; height: 100%;" type="text"/>
		-	=

<input style="width: 100%; height: 100%;" type="text"/>	<input style="width: 100%; height: 100%;" type="text"/>	=	<input style="width: 100%; height: 100%;" type="text"/>
		-	=

<input style="width: 100%; height: 100%;" type="text"/>	<input style="width: 100%; height: 100%;" type="text"/>	=	<input style="width: 100%; height: 100%;" type="text"/>
		-	=

<input style="width: 100%; height: 100%;" type="text"/>	<input style="width: 100%; height: 100%;" type="text"/>	=	<input style="width: 100%; height: 100%;" type="text"/>
		-	=