

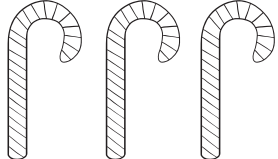
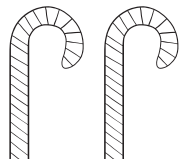




Name _____

Count the pictures. Write the number of pictures in the boxes above each picture and write the total number in the last box.

<input style="width: 100%; height: 40px;" type="text"/>	<input style="width: 100%; height: 40px;" type="text"/>	+	=	<input style="width: 100%; height: 100px;" type="text"/>
				
				

<input style="width: 100%; height: 40px;" type="text"/>	<input style="width: 100%; height: 40px;" type="text"/>	+	=	<input style="width: 100%; height: 100px;" type="text"/>
				
				

<input style="width: 100%; height: 40px;" type="text"/>	<input style="width: 100%; height: 40px;" type="text"/>	+	=	<input style="width: 100%; height: 100px;" type="text"/>
				
				

<input style="width: 100%; height: 40px;" type="text"/>	<input style="width: 100%; height: 40px;" type="text"/>	+	=	<input style="width: 100%; height: 100px;" type="text"/>
